
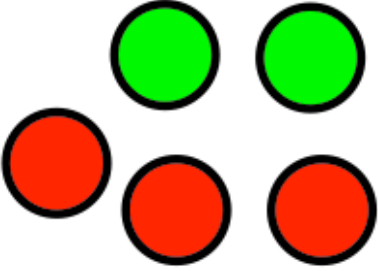
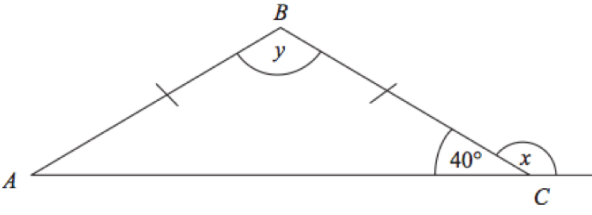


Name: _____

June 20th	5-a-day	Numeracy
 <p>What fraction of this shape is shaded? Give your answer in its simplest form.</p>		
	<p>Greg picks a bead at random.</p> <p>What is the probability of him selecting a red bead?</p>	
<p>Simplify</p> $2c + 3c + 4c$	<p>Simplify</p> $f \times g \times 3$	
<p>Simplify</p> $x^2 + x^2 + x^2$		
	<p>Find x</p> <p>Find y</p>	