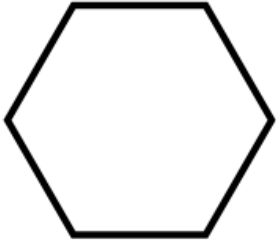
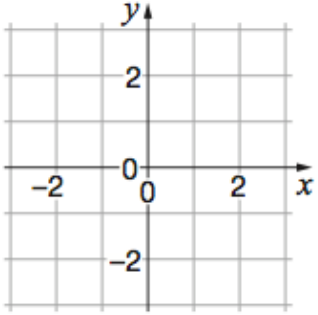
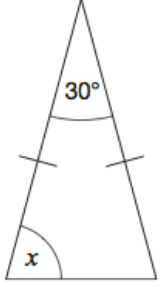



Name: _____

May 15th	5-a-day	Numeracy												
 <p>Name this shape _____</p>	<p>Draw a kite</p>													
	<p>Plot the coordinate (-2, -1)</p>													
	<p>Find x</p>													
<p>Write as a mixed number</p> 														
<p>spinner 1</p> <table border="1" data-bbox="277 1765 596 2002"> <tr> <td></td> <td>1</td> <td>2</td> <td>3</td> </tr> <tr> <td>spinner 2</td> <td>2</td> <td>4</td> <td></td> </tr> <tr> <td>3</td> <td></td> <td></td> <td></td> </tr> </table>		1	2	3	spinner 2	2	4		3				<p>Two spinners are spun. The scores are multiplied together to give a total score.</p> <p>Complete the table.</p> <p>What is the probability of an odd total score?</p>	
	1	2	3											
spinner 2	2	4												
3														