

Name: _____

Exam Style Questions

2D Shapes



Corbettmaths

Ensure you have: Pencil, pen, ruler, protractor, pair of compasses and eraser

You may use tracing paper if needed

Guidance

1. Read each question carefully before you begin answering it.
2. Don't spend too long on one question.
3. Attempt every question.
4. Check your answers seem right.
5. Always show your workings

Revision for this topic

www.corbettmaths.com/contents

Video 1



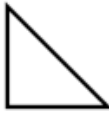
1. The names of five shapes are given.

pentagon triangle hexagon kite rectangle

Three of them are drawn below.



A



B



C

Complete these statements.

Shape A is called a Pentagon

Shape B is called a Triangle

Shape C is called a Rectangle

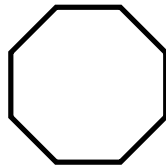
(3)

2. (a) How many sides has a hexagon?

6 sides

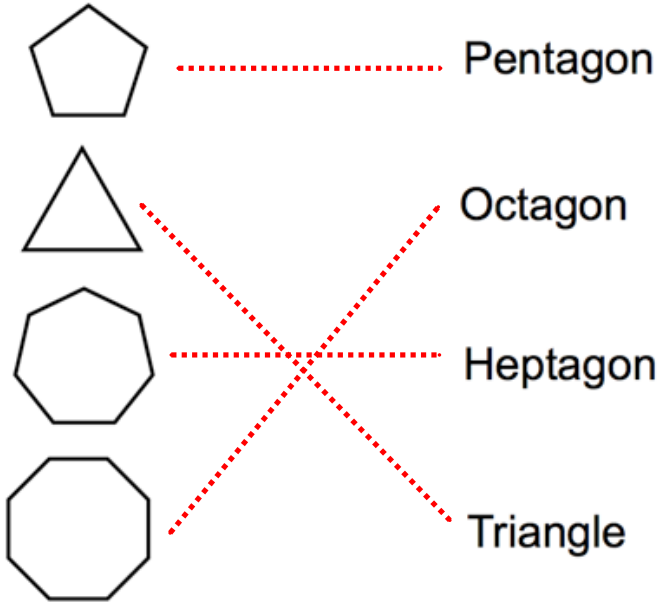
(1)

(b) Draw an octagon.



(1)

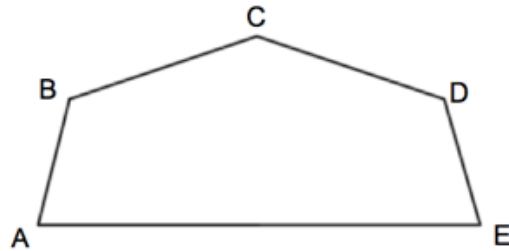
3. Below is a list of shapes and their names.



Match each shape to the correct name.

(4)

4. Shown is a shape ABCDE.



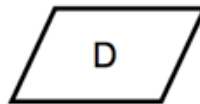
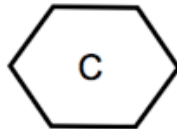
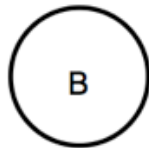

(a) What is the name of shape ABCDE?

Pentagon
.....
(1)

(b) Measure the length of line AE.

Depends on printing
.....cm
(1)

5.



(a) Which shape is a circle?

Shape..... B
(1)

(b) Which shape is a hexagon?

Shape..... C
(1)

(c) Which shape is a square?

Shape..... A
(1)

(d) Which shape is a parallelogram?

Shape..... D
(1)