

Name: _____

Exam Style Questions

Congruent Shapes
Similar Shapes



Corbettmaths

Ensure you have: Pencil, pen, ruler, protractor, pair of compasses and eraser

You may use tracing paper if needed

Guidance

1. Read each question carefully before you begin answering it.
2. Don't spend too long on one question.
3. Attempt every question.
4. Check your answers seem right.
5. Always show your workings

Revision for this topic

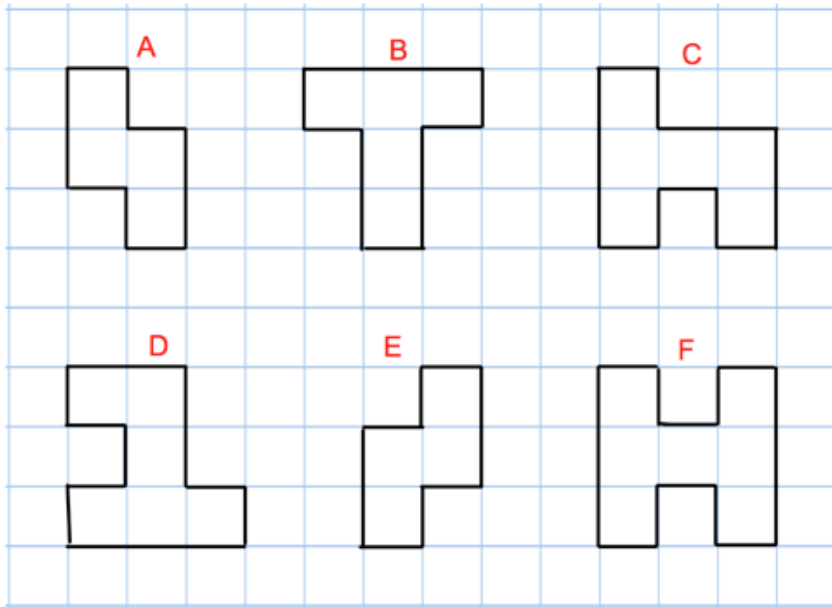
www.corbettmaths.com/contents

Video 66

Video 291



1. Here are six shapes.



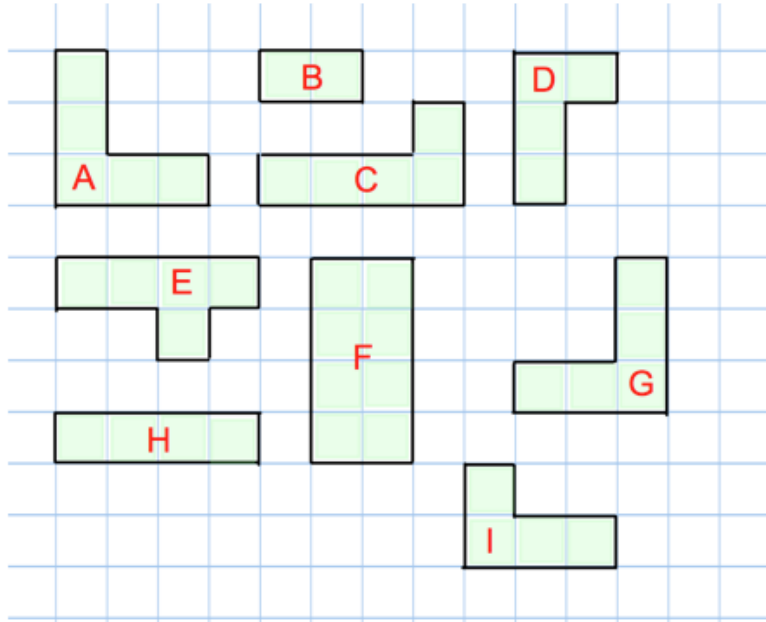
(a) Which shape is congruent to shape E?

A
(1)

(b) Name two other congruent shapes.

C and D
(1)

2.



(a) Find a shape that is congruent to A.

G
(1)

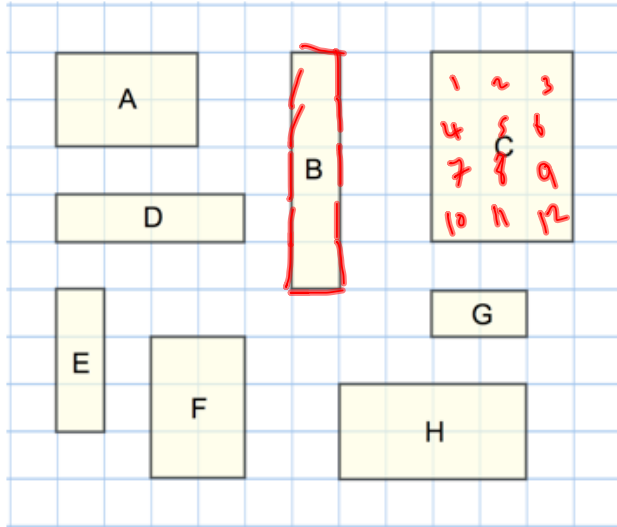
(b) Find another pair of congruent shapes.

D and I
(1)

(c) Find a shape that is mathematically similar to B.

F
(1)

3. Here are some rectangles on a grid of centimetre squares.



(a) Find the area of rectangle C.

.....12.....cm²
(1)

(b) Find the perimeter of rectangle B.

.....12.....cm
(1)

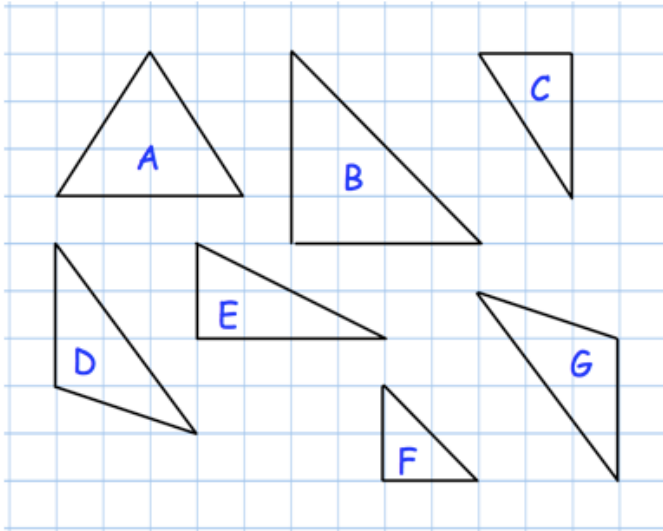
(c) Write down the names of the two rectangles that are congruent.

.....A..... andF.....
(1)

(d) Which rectangle is an enlargement of rectangle G?

.....H.....
(1)

4. Shown below are some triangle on a centimetre grid.



- (a) Write down the letters of the two triangles which are congruent.

..... *D* and *G*
(1)

Triangle B is an enlargement of triangle F.

- (b) Write down the scale factor of this enlargement.

..... *2*
(1)

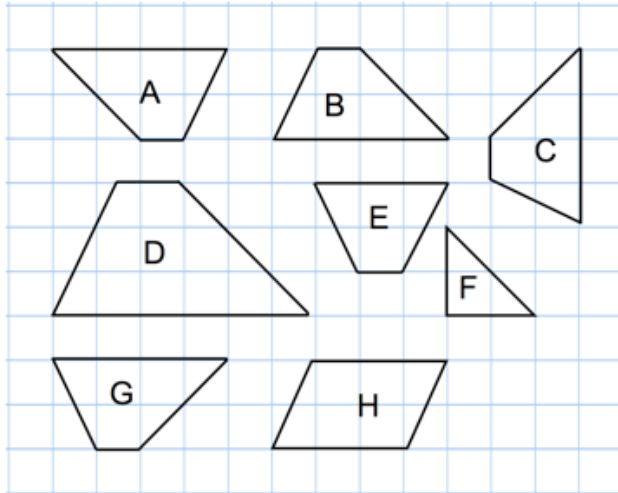
- (c) What kind of triangle is triangle A?

..... *isosceles*
(1)

- (d) What kind of triangle is triangle D?

..... *scalene*
(1)

5. The grid shows eight shapes A, B, C, D, E, F, G and H.



Write down the letters of the shapes which are congruent to shape A.

B, C, G

(2)

6. Triangles A and B are **similar**.

Tick the correct boxes.

	True	False	Maybe
If Triangle A is isosceles, Triangle B has to be isosceles.	<input checked="" type="checkbox"/>	<input type="checkbox"/>	<input type="checkbox"/>
Triangles A and B have different size angles	<input type="checkbox"/>	<input checked="" type="checkbox"/>	<input type="checkbox"/>
Triangle A has a larger area than Triangle B	<input type="checkbox"/>	<input type="checkbox"/>	<input checked="" type="checkbox"/>

(3)