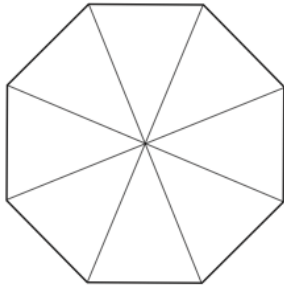


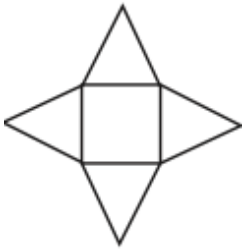
12th April



Corbettmaths



Shade in 75% of this shape



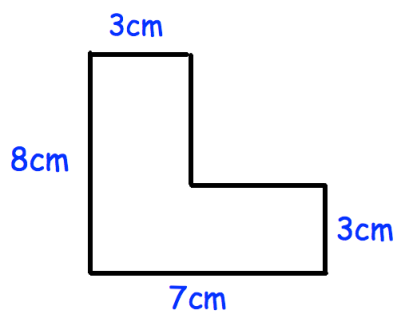
This is the net of which solid?

How many edges does that solid have?

Write down all the factors of 33

Work out

$$(-3)^2$$



Find the perimeter of the shape shown.