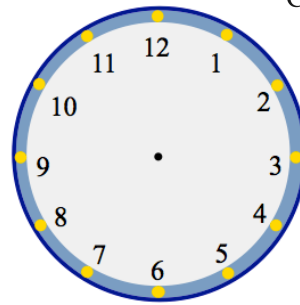
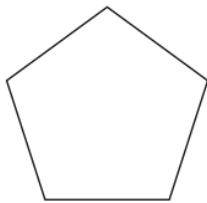


17th April

Corbettmaths

Show the time 11:25 on the clock

Work out $10 + 2 \times 4$ Work out $10 \div 2 + 12 \div 3$ 

Name _____



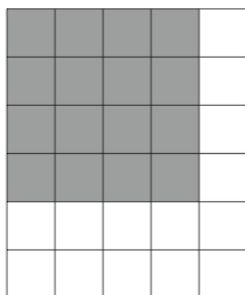
Name _____

meter reading

Jan 5463

June 5651

How many units of electricity have been used?



What fraction of the grid is shaded?

Give your answer in its simplest form.