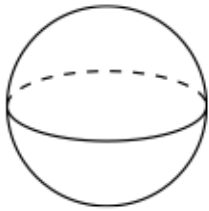


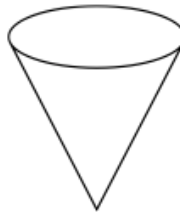
20th April



Corbettmaths

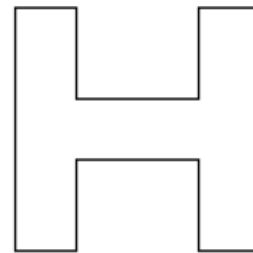


Name this solid _____



Name this solid _____

Draw all the lines of symmetry on the letter H.



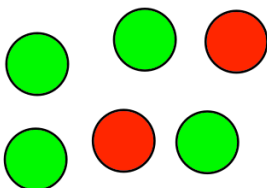
Complete the tally chart

Green Red Green Green White
 Blue Green Red Red Red
 Red Red Green Blue Green

Colour	Tally	Frequency
Blue		
White		
Red		
Green		

Victoria thinks 27 is a prime number.

Explain why she is wrong.



A disc is selected at random

Write down the probability of picking a green disc.

Give your answer as a simplified fraction.