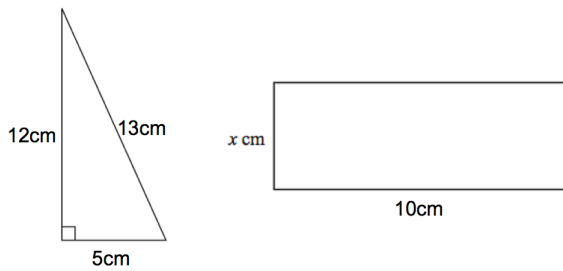


23rd April



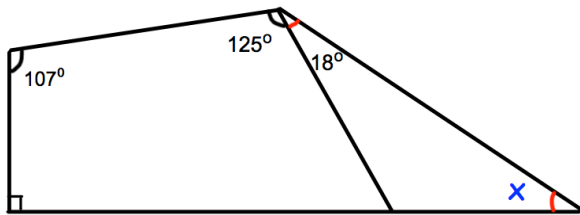
Corbettmaths

$$\frac{1}{7} + \frac{5}{6}$$



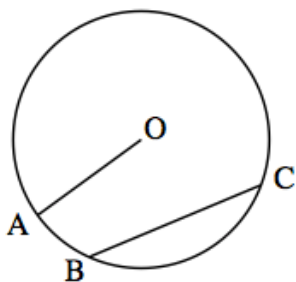
The triangle and the rectangle have the same area.

Find x .



Find the size of angle x .

Write down four common multiples of 9 and 6.



What is the name of the line OA?

What is the name of the line BC?