

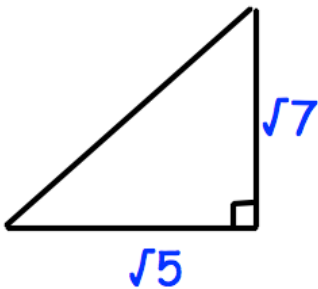
27th April



Corbettmaths

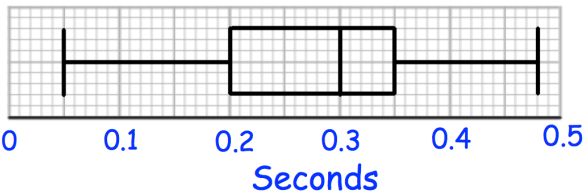
Solve

$$2y^2 - y = 15$$

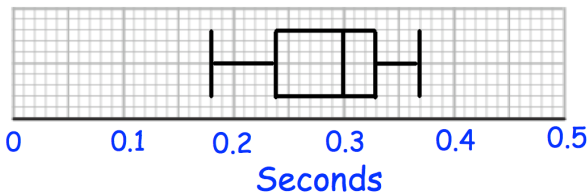


Calculate the length of the hypotenuse. Give your answer as a surd.

Reaction Times - Group A



Reaction Times - Group B



Shown are the reaction times of two groups of people.

Compare the distributions.

In the sales, a CD player costs £64 from Electrics'R'Us and the same CD player costs £64.60 from Music World.

Which shop has the cheapest normal price?

Electrics'R'Us

$\frac{1}{5}$  off normal price

Music World

15% off normal price