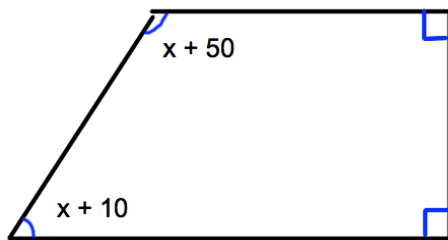


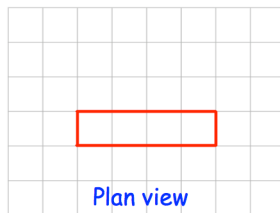
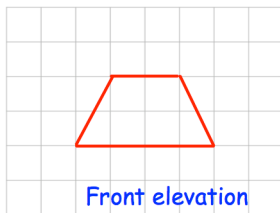
3rd April



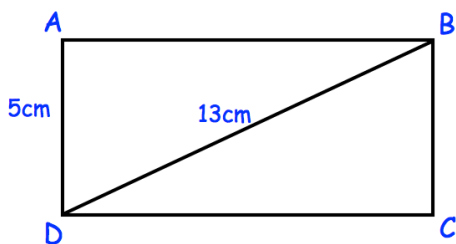
Corbettmaths

Factorise  $4mn - 16m^2$ 

Calculate the size of the largest angle in the trapezium.



Draw a sketch of the solid shape.



Shown is a shape made out of 5 pieces of metal.  
Work out the total length of the 5 pieces of metal.

Megan has 102 DVDs.  
This number of DVDs is 70% more than the number she had last month.

How many DVDs did Megan have last month?