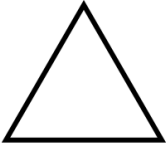
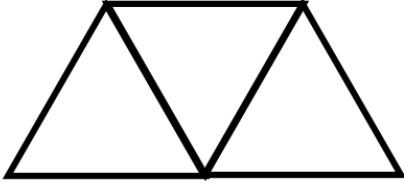



4th April	
<p>Work out</p> $0.438 \div 3$	<p>Work out</p> 0.019×0.24
<p>There are 20 counters in a bag.</p> <p>8 of the counters are blue.</p> <p>4 of the counters are red.</p> <p>The rest are green.</p>	<p>What is the probability of selecting a green counter?</p>
 <p>Shown is an equilateral triangle with side length 5cm.</p>	<p>Find the perimeter of the triangle.</p>
<p>Three identical triangles, each with side length 5cm are put together to make one larger shape.</p> 	<p>Jemima says that the perimeter of the larger shape will be three times the perimeter of one of the triangles.</p> <p>Explain why Jemima is wrong.</p>
 <p>The express bus from Dublin to Belfast takes x minutes.</p> <p>The standard bus takes 29 minutes longer.</p>	<p>Write down an expression for the time the standard bus takes.</p>