

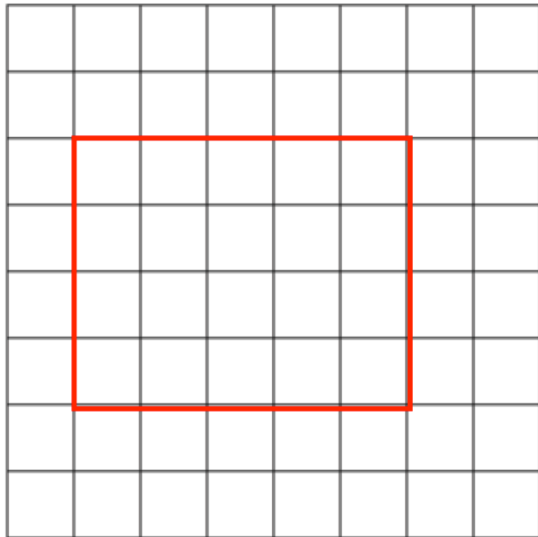
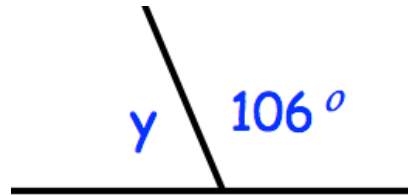
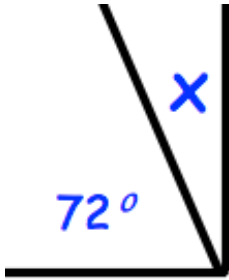
12th August



Corbettmaths

Round 272 to the nearest 10

Round 272 to the nearest 100



Find the area of the rectangle

Draw the lines of symmetry on the rectangle

The rule for continuing a sequence is

Multiply by 4
then
Subtract 3

The first term is 10.

Work out the second term