
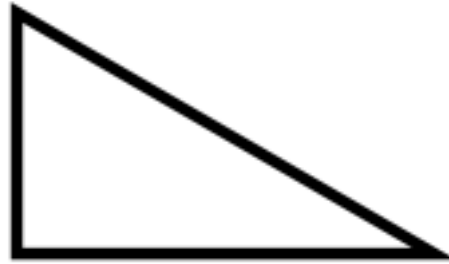


24th August



Corbettmaths

Name this type of triangle



This is a centimetre grid.

What is the area of the shape?

$$\text{£}15 \times \text{number of hours}$$

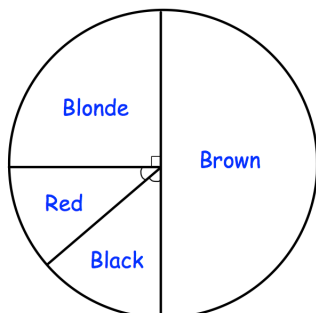
The cost of a plumber is found by using the formula above.

A job costs £60.

How long did the job last?

Write 0.2 as a fraction

Write 0.2 as a percentage



The pie chart shows information about the hair colour of the students in a class. There are 8 students with blonde hair.

How many students are in the class?