

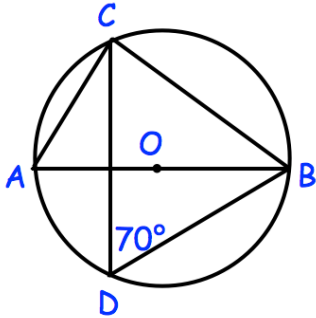
24th August



Corbettmaths

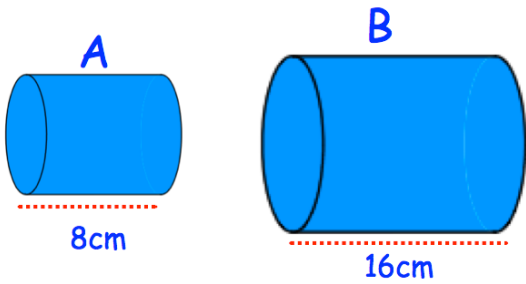
$$\frac{4}{11}$$

Write as a decimal.



AB is the diameter. O is the centre.
Find angles

- (a) CAB (b) ABC



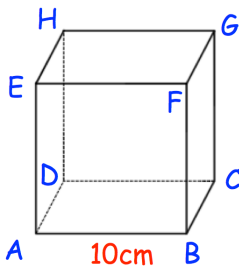
The volume of A is 200cm^3 .
Find the volume of B.

A and B are similar.

W is directly proportional to the square of M.

When $W = 80$, $M = 2$.

Work out W when $M = 6$.



Can a 12cm rod fit into cube ABCDEFGH?