


25th August

Corbettmaths



The rectangle is drawn on a centimetre grid.

What is its area?

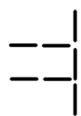
How many minutes are in half an hour?

How many minutes are in two and a half hours?

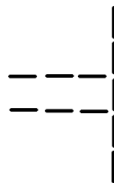
$$\frac{1}{2} \text{ of } \boxed{} = 60$$



Pattern 1



Pattern 2



Pattern 3

Draw Pattern 4

Work out the number that is halfway between 125 and 275