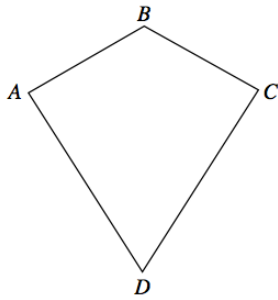


26th August



Corbettmaths



Is AB parallel to CD?

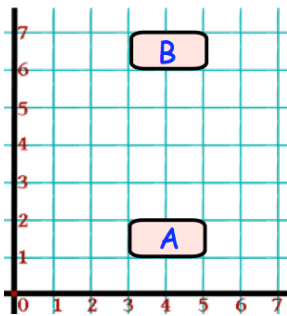
Does Angle A = Angle C?

Convert 0.14 into a fraction in its simplest form.

Convert 80% into a fraction in its simplest form.

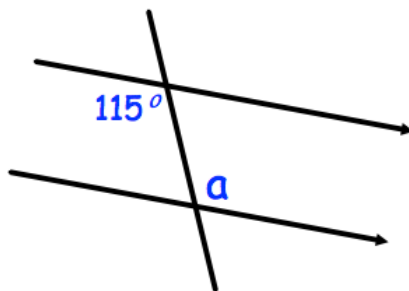
Martin and Laura share 415 sweets in the ratio 1:4.

How many sweets does Laura receive?



B is a reflection of A.

What is the equation of the mirror line?



Size of a?

Reason?