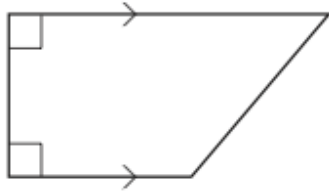
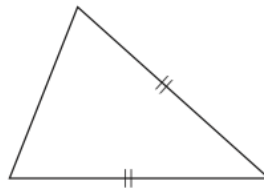


**7th August**

Corbettmaths



Name \_\_\_\_\_



Name \_\_\_\_\_

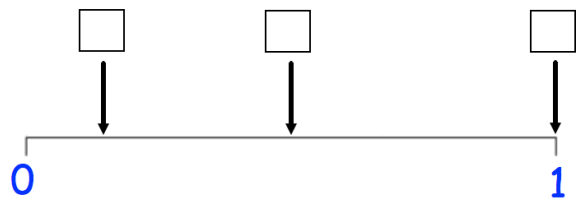
Write 50% as a fraction

Work out  $9.8 - 1.53$ 

A fair six-sided dice is thrown.



The probabilities of the following events have been marked on the probability scale below.

**A:** A number less than 7 is thrown.**B:** A "2" is thrown.**C:** An even number is thrown.

Place the events A, B and C in the correct boxes.