

14th December

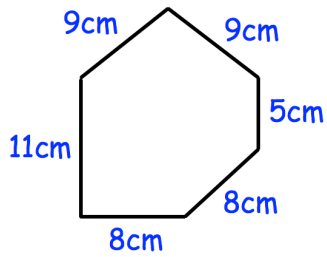
Corbettmaths

Simplify

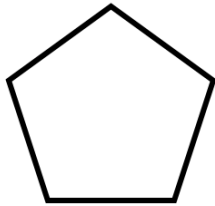
$$W + W + W + W$$

Simplify

$$W \times W$$

Not drawn
to scale

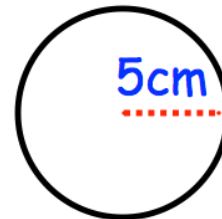
Find the perimeter of this hexagon.



This pentagon has a perimeter that is twice the perimeter of the hexagon above

Find the length of each side.

Calculate the area



Write 200 as a product of primes.