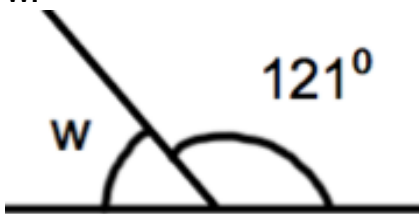



**26th December**

Corbettmaths

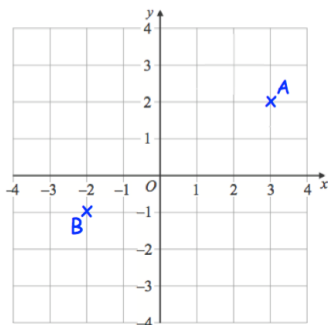
$39 \times 12$

$128 \times 3$

Work out  $19.6 - 12.7$ Work out the size of angle marked  $w$ . $w$  $121^\circ$ 

This is the net for a 3D shape.

Sketch the 3D shape.



Write down the coordinates of A.

Write down the coordinates of B.