

7th December



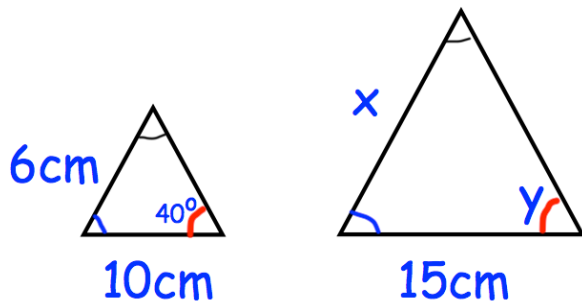
Corbettmaths

Expand and simplify

$$(5w + 1)(3w + 2)$$

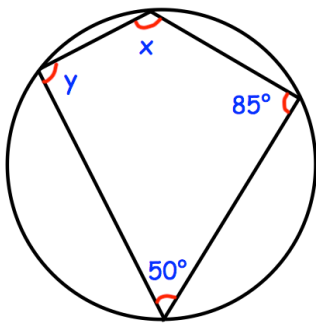
Expand and simplify

$$(y - 8)^2$$



Work out side length, x

Work out angle y

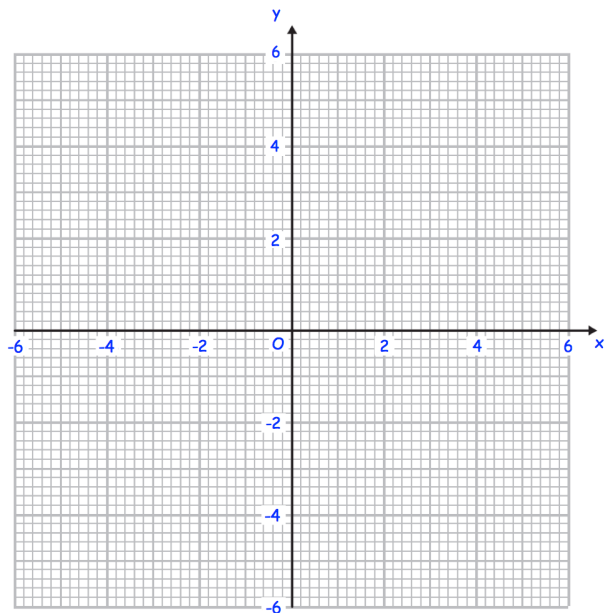


Find x and y.

Complete the table of values for

$$y = \frac{2}{x}$$

x	-5	-2	-1	-0.5	0.5	1	2	5
y								



On the grid, draw the graph of

$$y = \frac{2}{x}$$

for $0.5 \leq x \leq 10$