

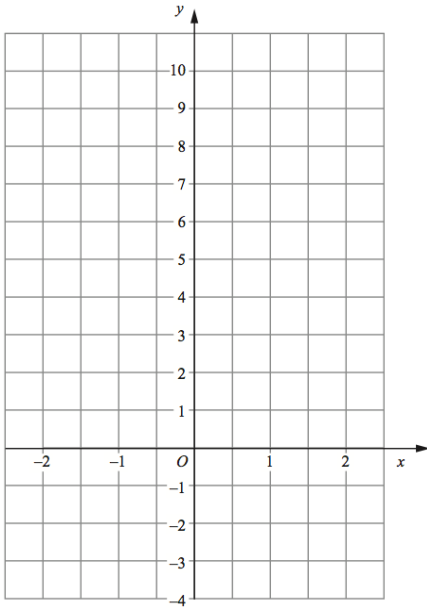
2nd February



Corbettmaths



Calculate bearing of A from B.



Complete the table of values for

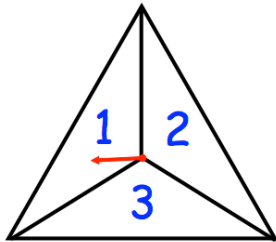
$$y = 3^x$$

x	-2	-1	0	1	2
y					

Draw the graph of

$$y = 3^x$$

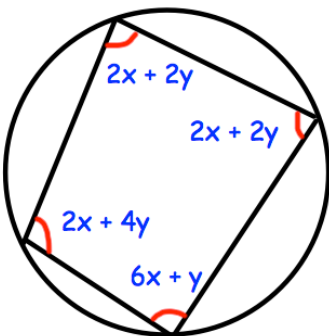
for values of x from -2 to 2



The spinner is spun twice.

A score is found by adding the two numbers together.

Find the probability of a score of 6



Find x and y