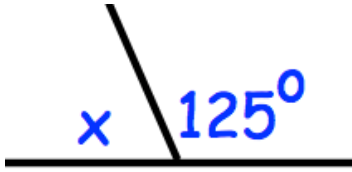


22nd February

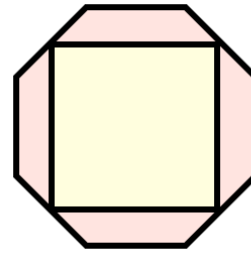


Corbettmaths




A square is drawn inside a regular octagon.

Draw all the lines of symmetry on the shape.



Write 19% as a fraction

Write 40% as a fraction.  
Give your answer in its simplest form.



From the numbers in the rectangle

Write down the number that is not prime.

Write down any factors of 28

Write  $\frac{9}{10}$  as a decimal.