

28th February

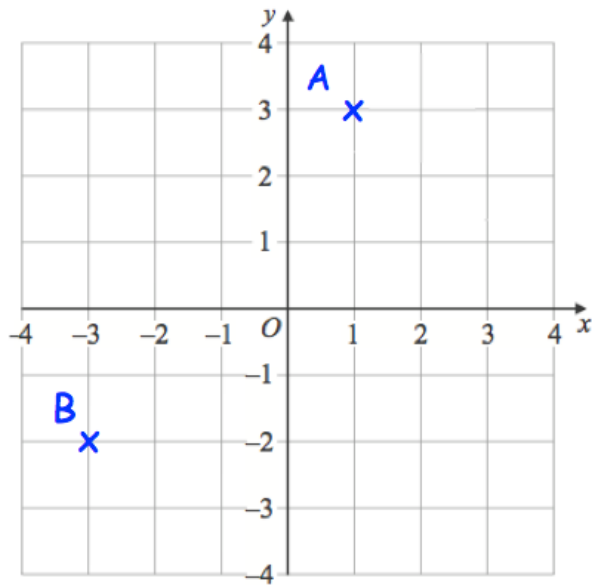


Corbettmaths

$10^2$

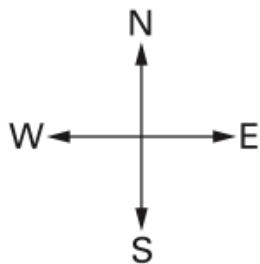
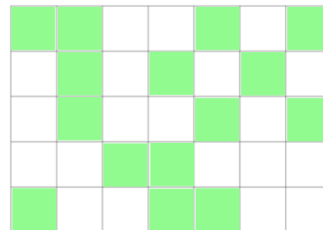
$5^2 + 4^2$

Write down the coordinates of the point A.



Write down the coordinates of the point B.

What fraction of the grid is shaded?



Bob is facing South. He turns clockwise through 90 degrees.

Which direction is he now facing?