

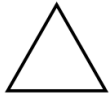
29th February



Corbettmaths



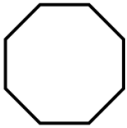
Pentagon



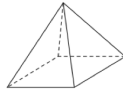
Octagon



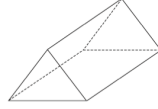
Heptagon



Triangle



Sphere



Triangular Prism



Square-based Pyramid



Cube

Work out 125.6×10

A pen costs £2.50

How much will 7 pens cost?

$$\frac{3}{4} = \frac{\square}{16}$$

$$\frac{\square}{5} = \frac{6}{15}$$