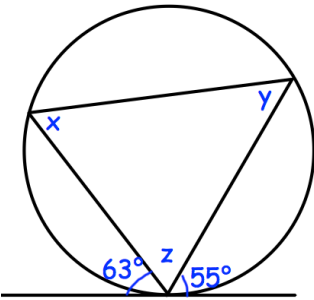


15th February



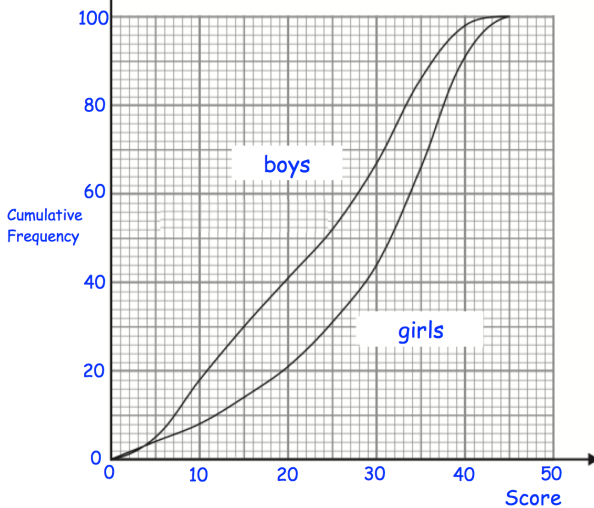
Corbettmaths



Find x , y and z .

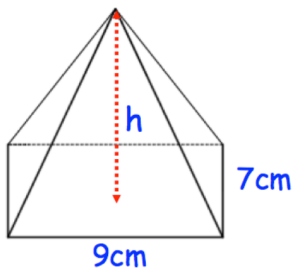
Make y the subject of:

$$ay + c = 5c - my$$



Estimate how many boys scored over 20 marks?

Estimate how many girls scored over 20 marks?



Shown is a pyramid with volume 126cm^3
Work out the vertical height.