

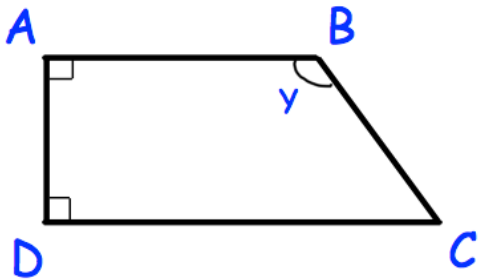
22nd February



Corbettmaths

Simplify  $3a + 2w - 5a - 9w$

$$\frac{2}{3} \div \frac{8}{11}$$

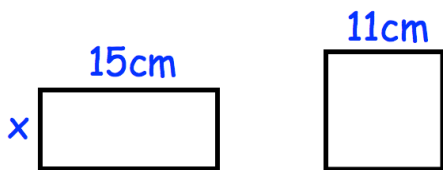


Fill in the spaces from the list of words below.

- obtuse      perpendicular  
acute      parallel      reflex

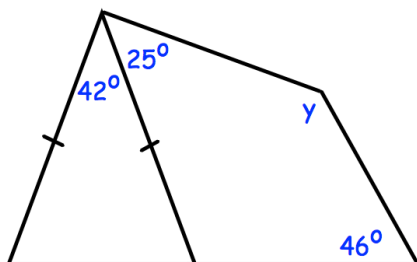
AB is ..... to AD.

DC is ..... to AB.



Find the width of the rectangle, x.

The perimeter of the rectangle and the square are the same.



Find y