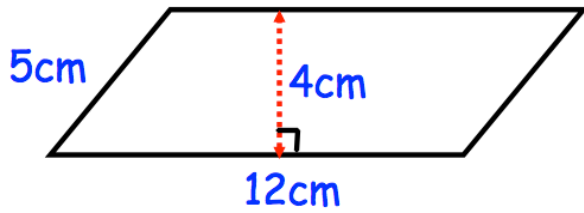


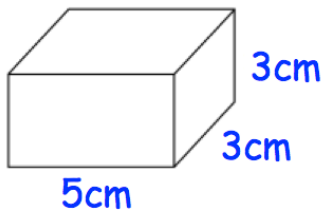
26th February



Corbettmaths



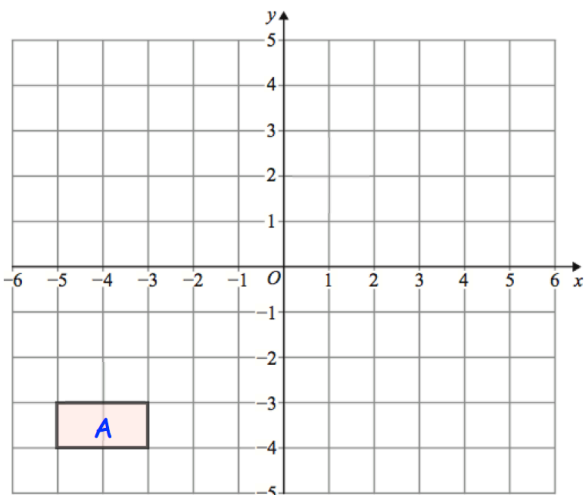
Find the area of the parallelogram



Calculate the volume of the cuboid

Expand $6(w + 9)$

Expand $5(4y - 3)$



Translate rectangle A by $\begin{pmatrix} 7 \\ 5 \end{pmatrix}$

Label the new shape B.

Reflect rectangle A using the x-axis as the mirror line.