
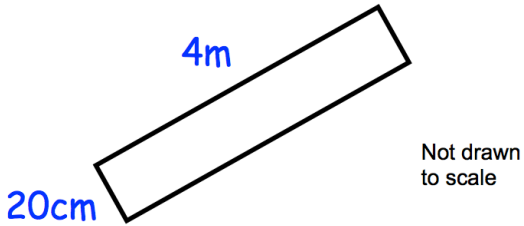





27th February		 Corbettmaths
 <p>Not drawn to scale</p>	<p>Work out the perimeter. Give your answer in centimetres.</p>	
Solve $x + 5 = 7$	Solve $9y - 4 = 41$	
<p><b>A</b></p>  <p><math>350\text{cm}^3</math></p>	<p><b>B</b></p>  <p>400 ml</p>	<p><b>C</b></p>  <p>0.08 Litres</p>
<p>Make <math>w</math> the subject of:</p> $w - a = g$		<p>List the containers in order, from least water to greatest water.</p>
<p>The timetable for a flight from London to Beijing is shown.</p> <p>Departure from London      5 August 20:25 Arrival in Beijing              6 August 13:10</p> <p>When it is 1pm in London, it is 8pm in Beijing.</p>	<p>How long should the journey take? Give your answer in hours and minutes.</p>	