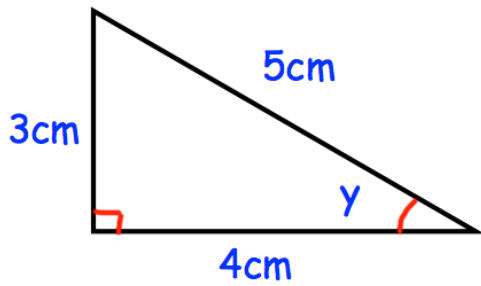


4th February



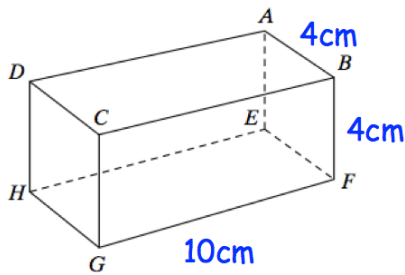
Corbettmaths



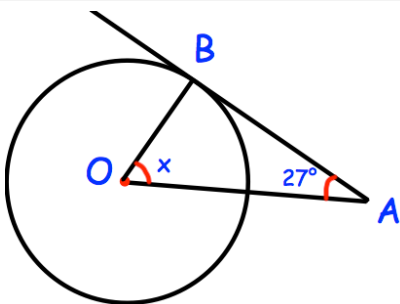
Write down the value of Sin y .

Write down the value of Cos y .

Write down the value of Tan y .



Work out the length of EG



AB is a tangent.
Find x .

The heights of 6 plants are listed below.
Each height is given to one decimal place.

- | | | |
|-------|-------|-------|
| 4.5cm | 7.2cm | 8.1cm |
| 9.6cm | 9.1cm | 3.1cm |

Work out the smallest possible mean.