

22nd January

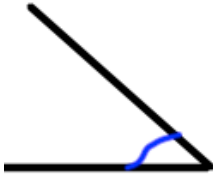
Corbettmaths

Fred has 13 twenty pence pieces.

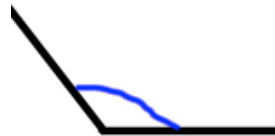
What is the total value of these coins?

Mary has 200 fifty pence pieces.

What is the total value of these coins?



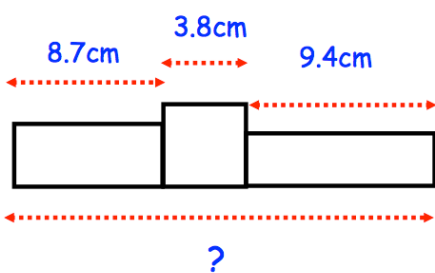
What type of angle is above?



What type of angle is shown above?

Work out

$$\frac{4}{9} \text{ of } 72\text{kg}$$



Find the total length of the three blocks

Here are the first four terms of a number sequence.

12 15 18 21

Write down the next term of the number sequence

Explain how you found your answer.