

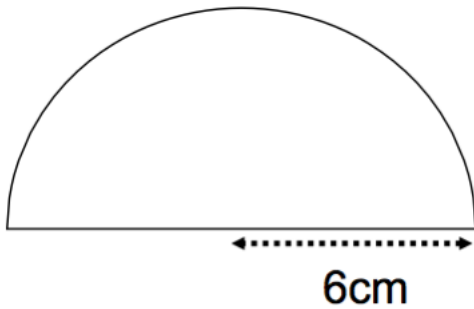
26th January



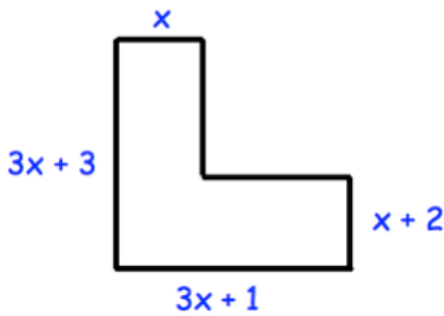
Corbettmaths

The angles in a triangle are in the ratio 1: 2: 9.

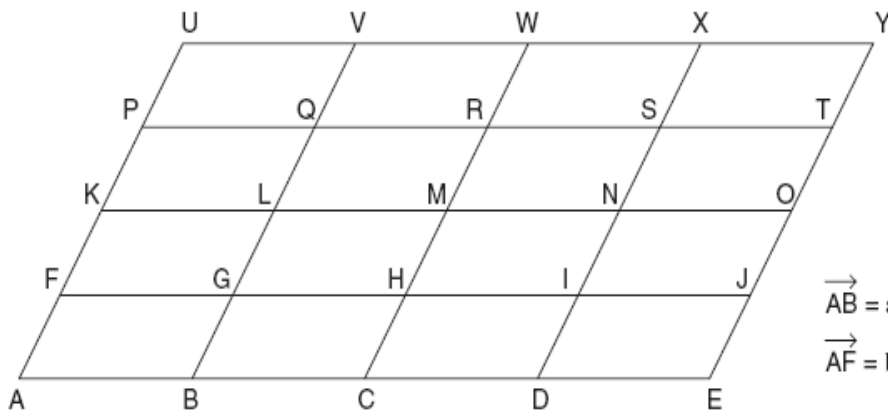
What is the size of each angle?



Find the perimeter



Find an expression for the perimeter.



Write a vector for \overrightarrow{AH} in terms of **a** and **b**

Write a vector for \overrightarrow{DU} in terms of **a** and **b**