

3rd January

Corbettmaths

Anna has eleven **fifty pence** pieces.



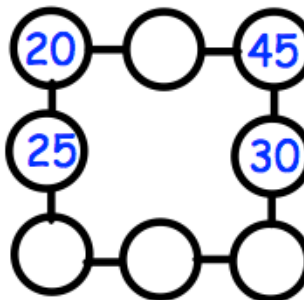
How much money does Anna have in total?

Draw a line parallel to the line AB.




In the diagram, three circles in a straight line **must add to 100**.


Write in the missing numbers.



Draw all the **lines of symmetry** on the square below



Draw all the **lines of symmetry** on the rectangle below



Multiply 29 by 7