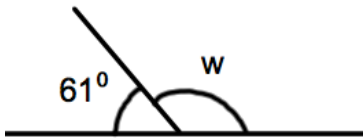
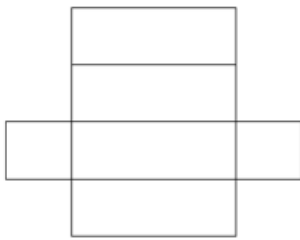


9th January

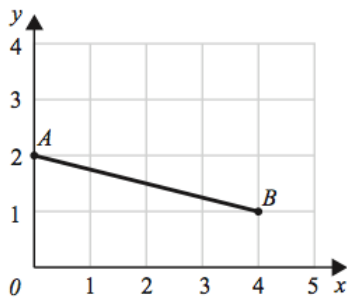


Corbettmaths

Calculate $52 + 165$ Work out $471 - 356$ Diagram not
drawn accuratelyFind the size of the angle w .

Shown is a net for a solid.

Write down the name of the solid.



What is the coordinate of A?

What is the coordinate of B?

Choose a sensible **metric** unit for the followingThe distance from Birmingham to London
is 179 _____

The height of the tallest living person is

232 _____