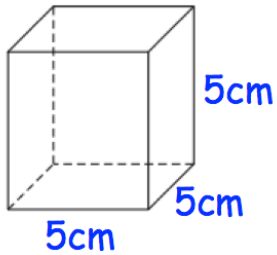


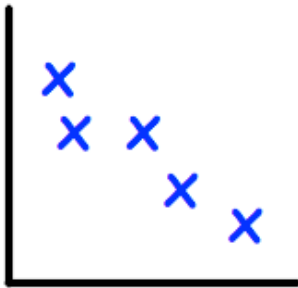
1st January



Corbettmaths



Work out the volume of the cube.  
State the units of your answer.



What type of correlation is shown?

$$\frac{3}{4} - \frac{1}{3}$$

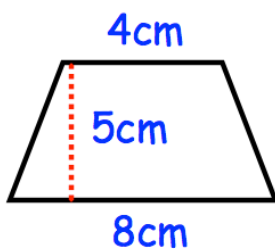
$$\frac{3}{4} + \frac{4}{7}$$

Jam is made from sugar and strawberries in the ratio 3:5.

A jar contains 150g of sugar.

How many grams of strawberries are in the jar?

How many grams of jam are in the jar?



Calculate the area of the trapezium