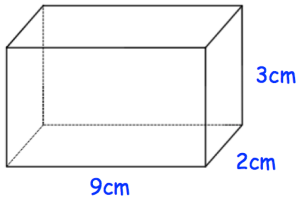


26th January



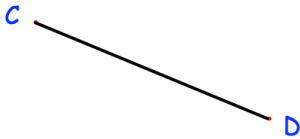
Corbettmaths

Solve $\frac{x}{2} - 3 = 7$



Work out the volume of the cuboid.

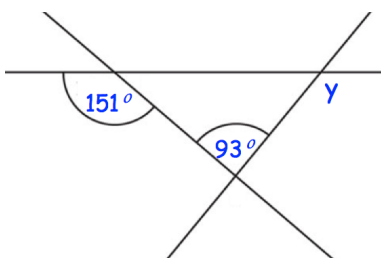
Scale: 1cm represents 100km



Calculate the actual distance from C to D

The weight of a 2p coin is 7g.

Find the weight of £8 worth of 2p coins.
Give your answer in kilograms.



Above are 3 straight lines.

Find the size of angle y.