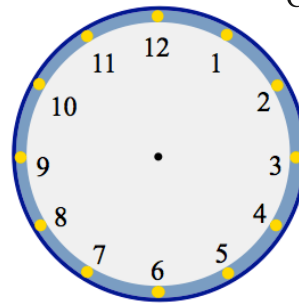


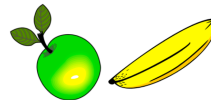
10th July

Corbettmaths

Show the time 10:45pm on the clock



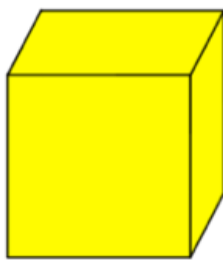
Sarah buys an apple for 41p and a banana for 27p.



How much more expensive is an apple than a banana

Simon has made a mistake.
Explain his mistake.

$$\begin{array}{r}
 8 \quad 5 \quad 9 \\
 + \quad 1 \quad 7 \quad 6 \\
 \hline
 1 \quad 0 \quad 2 \quad 5
 \end{array}$$



How many edges does a cube have?

Simplify fully

$$\frac{25}{35}$$