

11th July



Corbettmaths

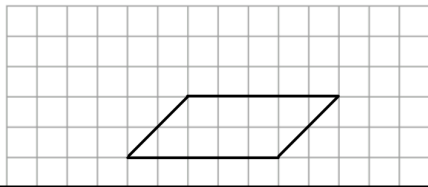
$45 + 76$

$86 - 21$


12 8 16 3 19 36

Write down the number that is 50% of 38

Write down the number that is a factor of 40

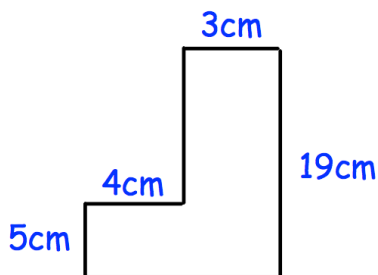


Mirror Line



Name the shape on the grid

Reflect the shape in the mirror line



Find the perimeter