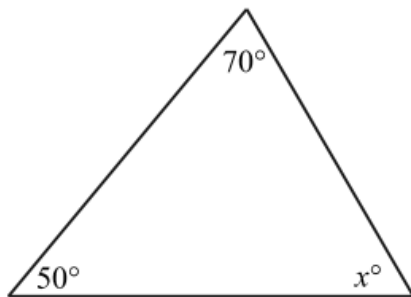
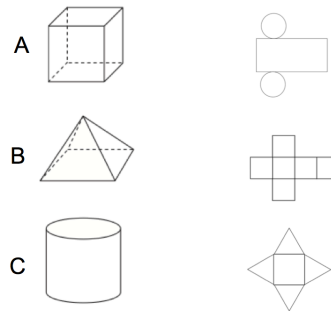


13th July

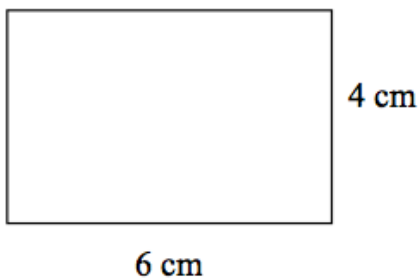


Corbettmaths

Match each solid to the correct net

Find  $x$ 

Find the perimeter of the rectangle



Add together:

- The number of days in August
- The number of seconds in three minutes
- The number of months in a year

150 students go on a school trip.  
Each minibus holds 22 students.

How many many minibuses are  
needed?