


14th July



Corbettmaths



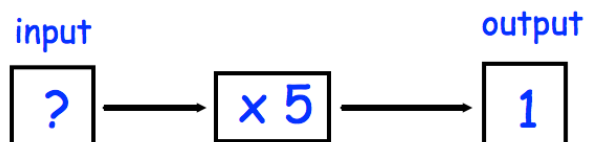
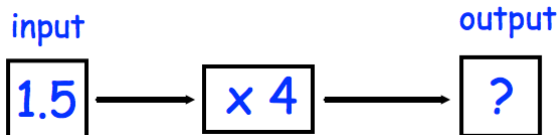
The rectangle is drawn on a centimetre grid.

Work out the perimeter

A cup costs £1.45

What is the cost of four cups?

Gary sat a test.
The test had 60 questions, each worth one mark.
He got three-quarters of the questions correct.
How many questions did Gary get correct?



Convert 4 metres into centimetres

Convert 8 kilometres into metres