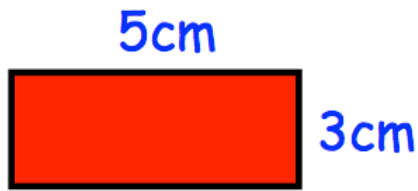


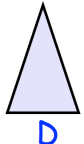
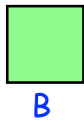
22nd July



Corbettmaths



Sketch a triangle with the same area as this rectangle.



Shape	A	B	C	D
Order of rotational symmetry				

Write 24 as a product of primes

Write 240 as a product of primes

Sarah makes cupcakes.  
She makes 16 cupcakes per hour.

She makes cupcakes for  $3\frac{1}{4}$  hours each day, for 5 days of the week.

The cupcakes are packed into boxes that hold 6 cupcakes.

How many boxes are needed to hold all the cupcakes Sarah has made in 5 days?