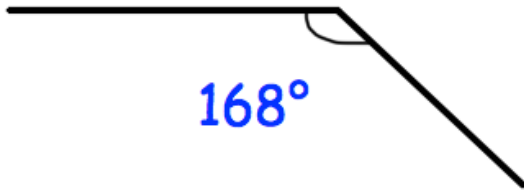


31st July



Corbettmaths



Shown is one angle from a regular polygon.

How many sides does it have?

A is inversely proportional to N^2

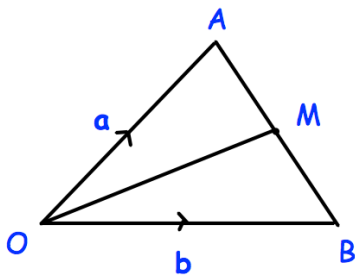
When $A = 9$, $N = 2$.

Find A when $N = 4$.

The length of a 200m running track is correct to the nearest metre.

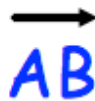
The time taken for Jenna to run the distance is 25.8 seconds measured to the nearest one-tenth of a second.

What is the fastest possible average speed?



M is the midpoint of AB

Find the vector



Find the vector



Find the vector

