



5th July



Corbettmaths

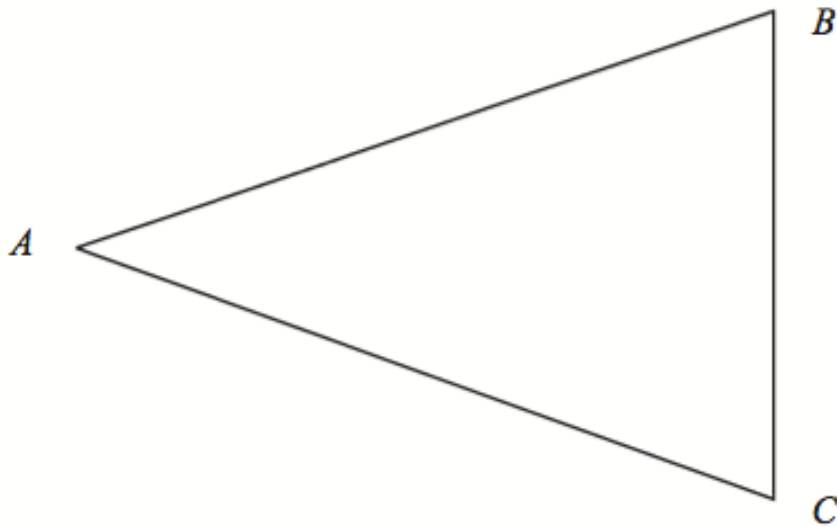


Draw a segment



Draw a tangent

ABC is a garden. A tree is planted closer to wall AB than wall BC
Show the possible locations the tree can be planted



How long will it take an athlete to run 6000m at an average speed of 3 metres per second?

Give your answer in minutes and seconds.

Solve the simultaneous equations

$$5x - 2y = 4$$

$$3x - 6y = 6$$