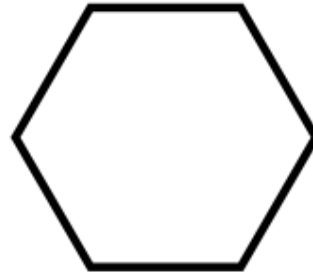


7th July



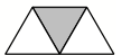
Corbettmaths

Name this shape:



Round 293 to the nearest 10

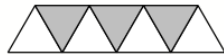
Round 293 to the nearest 100



Pattern 1



Pattern 2



Pattern 3

Draw pattern 4

Four tickets for a trip cost a total of £156.

Work out the cost of one ticket.

Draw a 75 degree angle