

8th July

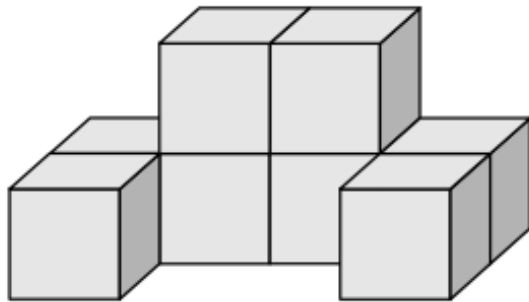


Corbettmaths

18% is greater than 0.2




Is Greg correct?  
Explain your answer.




Shown is the view from the front of a shape.


Draw the side elevation.



Draw the plan view.



Two fair six sided dice are rolled.



The numbers on the two dice are **multiplied** together to give a score.  
Complete the table

		Dice 1						
		x	1	2	3	4	5	6
Dice 2	1							
	2							
	3							
	4							
	5							
	6							

Find the probability of a score of 12

Find the probability of a score of 10 or more