

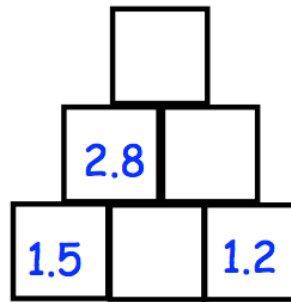
16th June



Corbettmaths

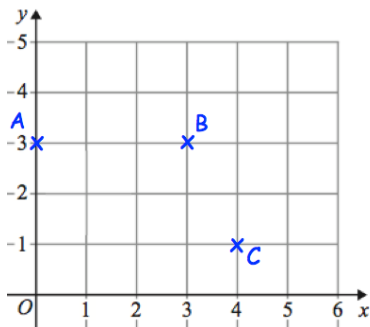
The number in each block is found by adding the two blocks directly beneath it.

Find the missing numbers.

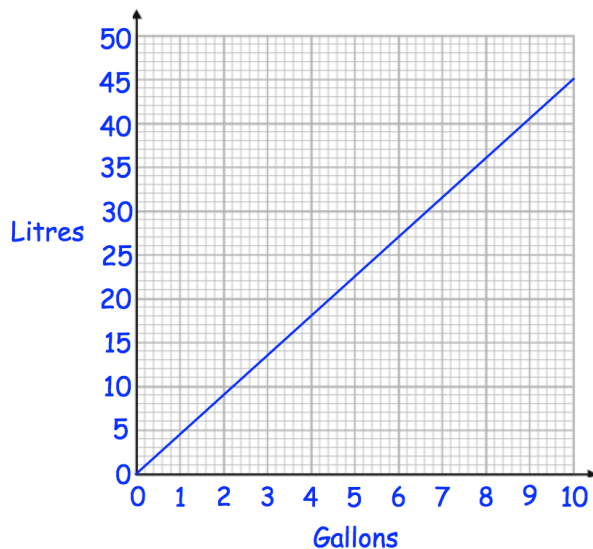


Find the mean of

4 2 5 8 6 4 2 3 5 1



ABCD is a parallelogram.
Write down the coordinates of D



Use the graph to convert 6 gallons to litres.

Use the graph to convert 10 litres to gallons.