

2nd June

Corbettmaths

Work out 10 cubed

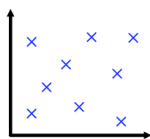
Work out the cube root of 64

Write down £1.50 as a fraction of £5

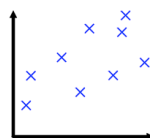
Write that answer as a percentage

Solve $5y - 2 = 28$ Solve $6(y + 2) = 54$

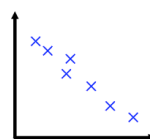
Match each scatter graph to the best description of the type and strength of correlation.



Strong positive correlation



Weak positive correlation



No correlation

Weak negative correlation

Strong negative correlation