





25th June		
<p>Shown below is a glass of water.</p> <div style="text-align: center;">  </div>	<p>Below are four estimates of the amount of water in the glass. Circle the most appropriate estimate.</p> <p>15ml            1.5L    150ml    15L</p>	
<p>The express bus from Dublin to Belfast takes <math>x</math> minutes. The standard bus takes 42 minutes longer.</p> <p>Write down an expression for the time the standard bus takes.</p>		
<p>The airplane takes half the time the express bus takes.</p> <p>Write down an expression for the time the airplane takes.</p>		
<p>Hannah is recording the number of letters in each word in an article.</p> <p>These are the first ten lengths.</p> <p>3    4    5    6    2 4    3    7    3    6</p>	<p>Work out the median.</p>	
<p>The 11<sup>th</sup> word has 4 letters.</p> <p>Tick the box which describes what affect this will have on the mean.</p>	<p>The mean will decrease      The mean will remain the same      The mean will increase</p> <p style="text-align: center;"> <input type="checkbox"/>                      <input type="checkbox"/>                      <input type="checkbox"/> </p>	