

26th June


Corbettmaths

Solve


$$8w = 48$$

Solve

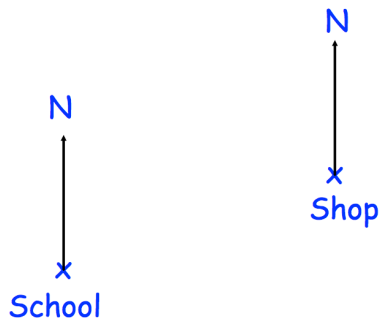
$$5y + 3 = 68$$



Draw the radius

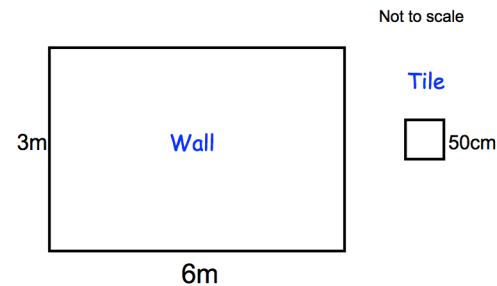


Draw the diameter



The scale of the map is 1cm = 100m.
Work out the real distance between the school and the shop.
Give your answer in metres.

Express 40p as a fraction of £5



Rosie is tiling her bathroom wall.
The wall is 6m by 3m.
Each square tile is 50cm by 50cm.
Each tile cost £3.

Calculate the cost of tiling the wall.