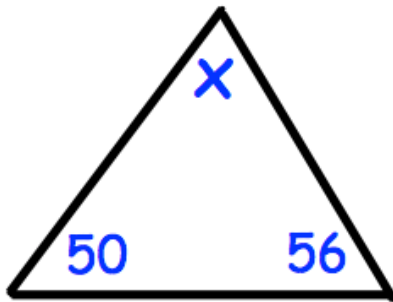


13th March




Corbettmaths

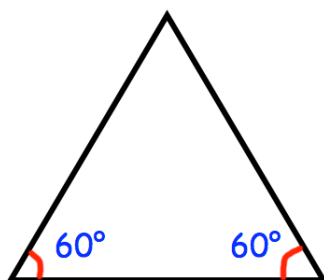
Work out $12.6 - 3.14$

A teacher has 153 sweets.
The teacher shares the sweets equally
among 9 students.

How many sweets does each pupil
receive?



$$\begin{array}{r} \square 2 4 \\ - 1 5 \square \\ \hline 6 \square 9 \end{array}$$



Not drawn
accurately

What type of triangle is shown?