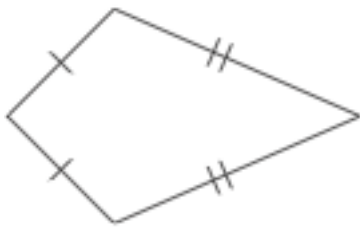


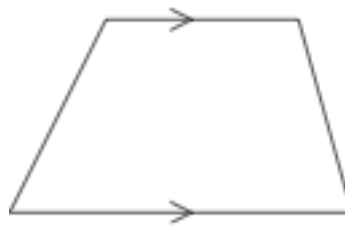
16th March



Corbettmaths



Name.....

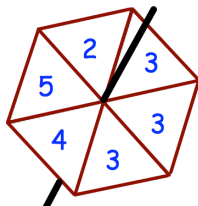


Name.....

Write 0.3 as a fraction

Write 25% as a fraction

$$\begin{array}{r}
 \square 0 \square \\
 - 381 \\
 \hline
 5 \square 1
 \end{array}$$



Amir makes a fair spinner with six sectors.

Impossible Unlikely Evens Likely Certain

Use a word from the box which best describes the probability of each of the following events

The spinner will land on 6

The spinner will land on 3